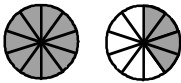
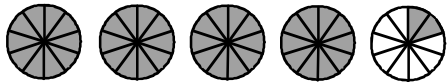


- Übung 16 -

Multipliziere folgende gemischte Zahlen und wandle den unechten Bruch um.



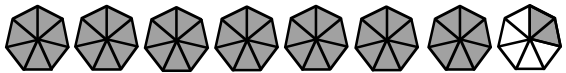
$$1 \frac{4}{10}$$



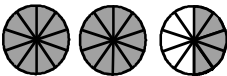
$$\boxed{\quad} \text{ — } = \boxed{\quad} \text{ — }$$



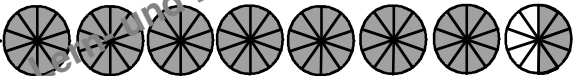
$$2 \frac{3}{7}$$



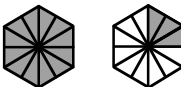
$$\boxed{\quad} \text{ — } = \boxed{\quad} \text{ — }$$



$$2 \frac{5}{10}$$



$$\boxed{\quad} \text{ — } = \boxed{\quad} \text{ — }$$



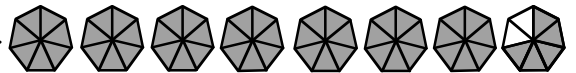
$$1 \frac{3}{12}$$



$$\boxed{\quad} \text{ — } = \boxed{\quad} \text{ — }$$



$$2 \frac{4}{7}$$



$$\boxed{\quad} \text{ — } = \boxed{\quad} \text{ — }$$