



+ Plus bis 400



301	302								310
311									
321									330
	332								
		343							350
			354						
				365					371
			374						
		383							390
391									400



301 + 2 =	311 + 2 =	321 + 2 =
331 + 2 =	341 + 2 =	351 + 2 =
361 + 2 =	371 + 2 =	381 + 2 =
391 + 2 =	392 + 2 =	393 + 2 =



+ Plus bis 400



360 361 _____

370 371 _____

380 381 _____

390 391 _____



360 + 1 =	360 + 2 =	360 + 3 =
370 + 1 =	370 + 2 =	370 + 3 =
380 + 1 =	380 + 2 =	380 + 3 =
390 + 1 =	390 + 2 =	390 + 3 =

328 329 _____

338 339 _____



- Minus bis 400



371	372								
								399	

_____ 374 375 376

_____ 377 378 379

_____ 384 385 386

_____ 387 388 389

_____ 394 395 396

_____ 397 398 399

REPO - Lern- und Lehrmedien

$375 - 2 =$	$376 - 2 =$	$379 - 2 =$
$385 - 2 =$	$386 - 2 =$	$389 - 2 =$
$395 - 2 =$	$396 - 2 =$	$399 - 2 =$



$380 - 2 =$	$390 - 2 =$	$400 - 2 =$
$373 - \underline{\quad} =$	$383 - \underline{\quad} =$	$393 - \underline{\quad} =$






Immer plus 10



300 310 _____ 330 340 _____ 360 _____

340 350 _____ 370 _____ 390 400







  	$300 + 10 =$
$10 + 10 =$	$310 + 10 =$
$20 + 10 =$	$320 + 10 =$
$30 + 10 =$	$330 + 10 =$
$40 + 10 =$	$340 + 10 =$
$50 + 10 =$	$350 + 10 =$
$60 + 10 =$	$360 + 10 =$
$70 + 10 =$	$370 + 10 =$
$80 + 10 =$	$380 + 10 =$
$90 + 10 =$	$390 + 10 =$

REPO - Lern- und Lehrmedien




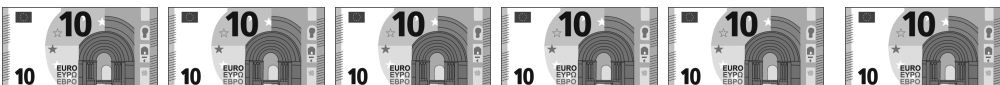
Bis 400



$10 + 10 + 10 = \underline{\hspace{2cm}}$	$100 + 100 + 100 = \underline{\hspace{2cm}}$
 <p style="text-align: center;">_____ €</p>	 <p style="text-align: center;">_____ €</p>
$10 + 10 + 10 + 10 = \underline{\hspace{2cm}}$	$100 + 100 + 100 + 100 = \underline{\hspace{2cm}}$
  <p style="text-align: center;">_____ €</p>	  <p style="text-align: center;">_____ €</p>

100 200 _____ 400

100 200 _____ _____







 <p style="text-align: right;">_____ €</p>
 <p style="text-align: right;">_____ €</p>



Wie viele sind es ?



297 298 _____ 300 301 302 _____ 304 _____

		_____ €
		_____ €
		_____ €
		_____ €
		_____ €
		_____ €


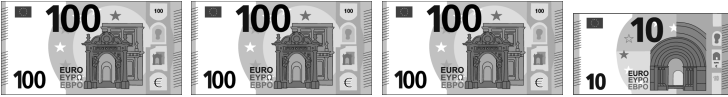

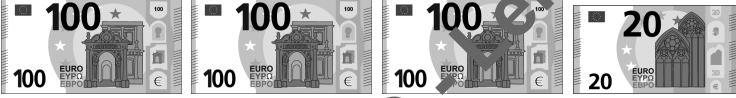
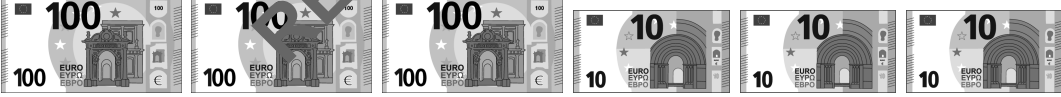





Wie viele sind es ?



300 310 320 _____ 340 _____ 360 _____ 380

 _____ €
 _____ €
 _____ €
 _____ €
 _____ €
 _____ €





+ Plus bis 400



300 301 302 _____ 304 _____ 306 _____ 308

300 310 320 _____ 340 _____ 360 _____ 380

$300 + 1 =$	$300 + 10 =$
$302 + 1 =$	$320 + 10 =$
$304 + 1 =$	$340 + 10 =$
$301 + 1 =$	$310 + 10 =$
$307 + 1 =$	$370 + 10 =$
$308 + 1 =$	$380 + 10 =$

$305 + 2 =$	$350 + 20 =$
$303 + 2 =$	$330 + 20 =$
$306 + 2 =$	$360 + 20 =$



Bis 400



291									
				305					
									320
				325					
									350
				365					
				385					390
	392								400

REPO - Lern- und Lehrmedien



299 + 2 =	319 + 2 =	349 + 2 =
-----------	-----------	-----------



- Minus bis 400



300 310 _____ 330 _____ 350 _____ 370

330 340 _____ 360 _____ 380 _____ 400



$390 - 10 =$	$400 - 10 =$	$310 - 10 =$
$330 - 10 =$	$320 - 10 =$	$340 - 10 =$
$350 - 10 =$	$380 - 10 =$	$360 - 10 =$
$370 - 10 =$	$310 - 10 =$	$400 - 10 =$

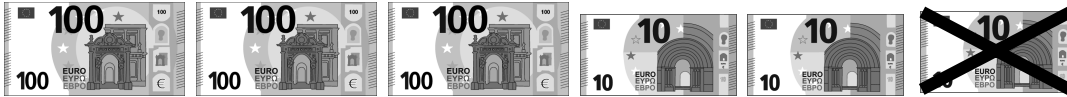
REPO - Lern- und Lehrmedien



$390 - 20 =$	$320 - 20 =$	$350 - 20 =$
$400 - 20 =$	$380 - 20 =$	$360 - 20 =$
$330 - 20 =$	$370 - 20 =$	



- Minus bis 400



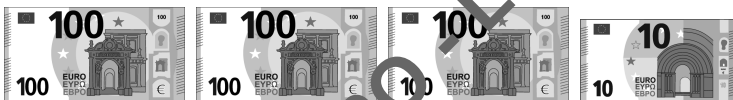
$$330 \text{ €} - 10 \text{ €} = \underline{\hspace{2cm}} \text{ €}$$




$$340 \text{ €} - 10 \text{ €} = \underline{\hspace{2cm}} \text{ €}$$



$$320 \text{ €} - 10 \text{ €} = \underline{\hspace{2cm}} \text{ €}$$



$$310 \text{ €} - 10 \text{ €} = \underline{\hspace{2cm}} \text{ €}$$



$$330 \text{ €} - 20 \text{ €} = \underline{\hspace{2cm}} \text{ €}$$





Bis 400



291									
	302								
				315					
									330

371									
				385					
									400

_____ 299 300 301

_____ 321 322 323

_____ 381 382 383

_____ 300 301 302

_____ 320 321 322

_____ 371 372 373

_____ 301 302 303

_____ 391 392 393

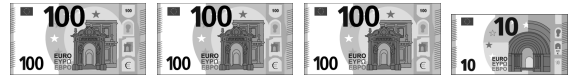
_____ 310 311 312

_____ 398 399 400






Bis fast 400



<div style="border: 1px solid black; width: 100%; height: 100%; background-color: #f0f0f0; margin-bottom: 10px;"></div> <div style="border: 1px solid black; width: 100%; height: 100%; background-color: #f0f0f0; margin-bottom: 10px;"></div> <div style="border: 1px solid black; width: 100%; height: 100%; background-color: #f0f0f0;"></div> <p style="text-align: right; margin-top: 20px;">_____</p>	<div style="border: 1px solid black; width: 100%; height: 100%; background-color: #f0f0f0; margin-bottom: 10px;"></div> <div style="border: 1px solid black; width: 100%; height: 100%; background-color: #f0f0f0; margin-bottom: 10px;"></div> <div style="border: 1px solid black; width: 100%; height: 100%; background-color: #f0f0f0;"></div> <p style="text-align: right; margin-top: 20px;">_____</p>
--	--

REPO - Lern- und Lehrmedien



_____ €



+ Plus mit Technik



380 €



350 €



300 €



20 €



10 €




10 €



_____ € + _____ € = _____ €



_____ € + _____ € = _____ €



_____ € + _____ € = _____ €



_____ € + _____ € = _____ €

REPO - Lern- und Lehrmedien