



Zählen bis 40



1	2	3							
									20
									30
31	32		34		36		38		40

31	32								
----	----	--	--	--	--	--	--	--	--


7 8 9 \_\_\_\_\_

17 18 19 \_\_\_\_\_

27 28 29 \_\_\_\_\_

37 38 39 \_\_\_\_\_

Wie viele Hunde sind es ?



\_\_\_\_\_



+ Plus bis 40



27 28 29 \_\_\_\_\_

$29 + 1 = \underline{\quad}$	$29 + 2 = \underline{\quad}$
$30 + 1 = \underline{\quad}$	$30 + 2 = \underline{\quad}$

31	32								
----	----	--	--	--	--	--	--	--	--

$34 + 1 = \underline{\quad}$	$35 + 1 = \underline{\quad}$	$36 + 1 = \underline{\quad}$
$37 + 1 = \underline{\quad}$	$38 + 1 = \underline{\quad}$	$39 + 1 = \underline{\quad}$

$33 + 2 = \underline{\quad}$	$34 + 2 = \underline{\quad}$	$35 + 2 = \underline{\quad}$
$36 + 2 = \underline{\quad}$	$37 + 2 = \underline{\quad}$	$38 + 2 = \underline{\quad}$




# Zählen bis 40




10 20 30 \_\_\_\_\_


Wie viele sind es ?




\_\_\_\_\_



\_\_\_\_\_



\_\_\_\_\_



\_\_\_\_\_




# Zählen bis 40



10 20 30 \_\_\_\_\_




Wie viele sind es




\_\_\_\_\_

---



\_\_\_\_\_

---



\_\_\_\_\_

REPO - Lern- und Lehrmedien









Zählen fast bis 40



28 29 \_\_\_\_\_

$30 + 1 = \underline{\quad}$	$30 + 2 = \underline{\quad}$	$30 + 3 = \underline{\quad}$
------------------------------	------------------------------	------------------------------

 <p style="text-align: center;">_____</p>	 <p style="text-align: center;">_____</p>
 <p style="text-align: center;">_____</p>	 <p style="text-align: center;">_____</p>
 <p style="text-align: center;">_____</p>	 <p style="text-align: center;">_____</p>

REPO - Lern- und Lehrmedien



**+ Plus bis 40**



6	7	8	_____	_____	_____
16	17	18	_____	_____	_____
26	27	28	_____	_____	_____
36	37	38	_____	_____	_____

$9 + 1 =$ _____	$19 + 1 =$ _____
$29 + 1 =$ _____	$39 + 1 =$ _____

**+ Plus 2** ○○

$8 + 2 =$ _____	$18 + 2 =$ _____
$28 + 2 =$ _____	$38 + 2 =$ _____



**+ Plus 3** ○○○

$7 + 3 =$ _____	$17 + 3 =$ _____
$27 + 3 =$ _____	$37 + 3 =$ _____



- Minus bis 40



$40 - 1 = \underline{\hspace{2cm}}$	$39 - 1 = \underline{\hspace{2cm}}$
$38 - 1 = \underline{\hspace{2cm}}$	$37 - 1 = \underline{\hspace{2cm}}$
$36 - 1 = \underline{\hspace{2cm}}$	$35 - 1 = \underline{\hspace{2cm}}$
$34 - 1 = \underline{\hspace{2cm}}$	$33 - 1 = \underline{\hspace{2cm}}$

REPO - Lern- und Lehrmedien



- Minus 2

$40 - 2 = \underline{\hspace{2cm}}$	$39 - 2 = \underline{\hspace{2cm}}$
$38 - 2 = \underline{\hspace{2cm}}$	$37 - 2 = \underline{\hspace{2cm}}$
$36 - 2 = \underline{\hspace{2cm}}$	$35 - 2 = \underline{\hspace{2cm}}$
$34 - 2 = \underline{\hspace{2cm}}$	$33 - 2 = \underline{\hspace{2cm}}$



+ Plus bis 40




10 20 30 \_\_\_\_\_

---




$10 + 10 =$  \_\_\_\_\_

---



$20 + 10 =$  \_\_\_\_\_

---



$20 + 20 =$  \_\_\_\_\_

REPO - Lern- und Lehrmedien





- Minus heißt weniger



10 20 30 \_\_\_\_\_



$30 - 10 = \underline{\hspace{2cm}}$



$30 - 10 = \underline{\hspace{2cm}}$



$40 - 10 = \underline{\hspace{2cm}}$



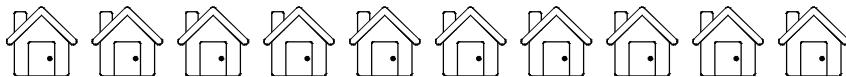
30 oder 40 ?



\_\_\_\_\_



\_\_\_\_\_



\_\_\_\_\_

REPO - Lern- und Lehrmedien



# Verbinden bis 40



20

19. .21

18. .22

.16 24.

17. .23

15. .25

14. .26

13. .27

12. 11. 10. 30. 29. 28.

9. .31

8. .32

7. .33

6. 5. 4. 3. 37. 36. 35. 34.

2. .38

1. — .39

40

REPO - Lern- und Lehrmedien



Rechnen mit Geld



32 €



35 €



38 €



1 €



2 €



32 € + \_\_\_\_ € = \_\_\_\_\_ €



\_\_\_\_\_ € + \_\_\_\_ € = \_\_\_\_\_ €



\_\_\_\_\_ € + \_\_\_\_ € = \_\_\_\_\_ €

32 + 2 = _____	35 + 1 = _____	38 + 2 = _____
----------------	----------------	----------------













# Rechnen mit Geld



Wie viel Cent sind es ?



 <p>___ Ct</p>	 <p>_____ Ct</p>
 <p>___ Ct</p>	 <p>_____ Ct</p>
 <p>___ Ct</p>	 <p>_____ Ct</p>
 <p>___ Ct</p>	 <p>_____ Ct</p>
 <p>___ Ct</p>	 <p>_____ Ct</p>

$1 + 1 + 1 = \underline{\quad}$	$10 + 10 + 10 = \underline{\quad}$
---------------------------------	------------------------------------



+ Plus bis 40

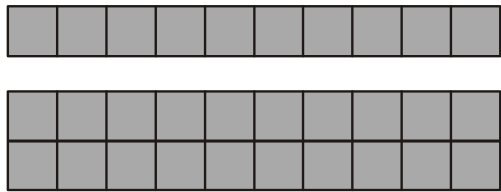



10 20 30 \_\_\_\_\_

$1 + 1 = \underline{\quad}$	$10 + 10 = \underline{\quad}$
$1 + 1 + 1 = \underline{\quad}$	$10 + 10 + 10 = \underline{\quad}$
$2 + 1 = \underline{\quad}$	$20 + 10 = \underline{\quad}$
$2 + 1 + 1 = \underline{\quad}$	$20 + 10 + 10 = \underline{\quad}$



$1 + 2 = \underline{\quad}$	$10 + 20 = \underline{\quad}$
$2 + 2 = \underline{\quad}$	$20 + 20 = \underline{\quad}$

 <p><math>10 + 20 = \underline{\quad}</math></p>	 <p><math>20 + 20 = \underline{\quad}</math></p>
---	--